



Please write clearly in block capitals.

Centre number

Candidate number

Surname _____

Forename(s) _____

Candidate signature _____

I declare this is my own work.

GCSE MATHEMATICS

F

Foundation Tier

Paper 1 Non-Calculator

Thursday 15 May 2025


Morning

Time allowed: 1 hour 30 minutes

Materials

For this paper you must have:

- mathematical instruments
- the Formulae Sheet (enclosed).



You must **not** use a calculator.

Instructions

- Use black ink or black ball-point pen. Draw diagrams in pencil.
- Fill in the boxes at the top of this page.
- Answer **all** questions.
- You must answer the questions in the spaces provided. Do not write outside the box around each page or on blank pages.
- If you need extra space for your answer(s), use the lined pages at the end of this book. Write the question number against your answer(s).
- Do all rough work in this book. Cross through any work you do not want to be marked.

Information

- The marks for questions are shown in brackets.
- The maximum mark for this paper is 80.
- You may ask for more answer paper, graph paper and tracing paper. These must be tagged securely to this answer book.

For Examiner's Use

Pages	Mark
2–3	
4–5	
6–7	
8–9	
10–11	
12–13	
14–15	
16–17	
18–19	
20–21	
22–23	
TOTAL	

Advice

In all calculations, show clearly how you work out your answer.



JUN2583001F01

Answer **all** questions in the spaces provided.

*Do not write
outside the
box*

1 (a) Write down the next number in the sequence

1 4 7 10

[1 mark]

Answer _____

1 (b) Write down the next number in the sequence

2 4 8 16

[1 mark]

Answer _____



1 (c) Write down the next number in the sequence

20 14 8 2

[1 mark]

Answer _____

1 (d) Work out $3 \times (-6)$

[1 mark]

Answer _____

Turn over for the next question



2 Here is a card from a game.

	13		32
8		27	
	15		36

2 (a) Write down the number **from the card** that is a multiple of 5

[1 mark]

Answer _____

2 (b) Write down the number **from the card** that is a factor of 40

[1 mark]

Answer _____

2 (c) Write down the number **from the card** that is a prime number.

[1 mark]

Answer _____


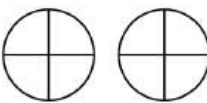
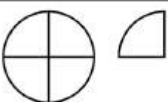

2 (d) Write down the number **from the card** that is a square number.

[1 mark]

Answer _____



- 3 The pictogram shows information about the endings of street names in a town.
The key is missing.

Road	
Close	
Avenue	
Lane	

In the town, there are 48 street names ending in **Close**.

How many street names end in **Avenue**?

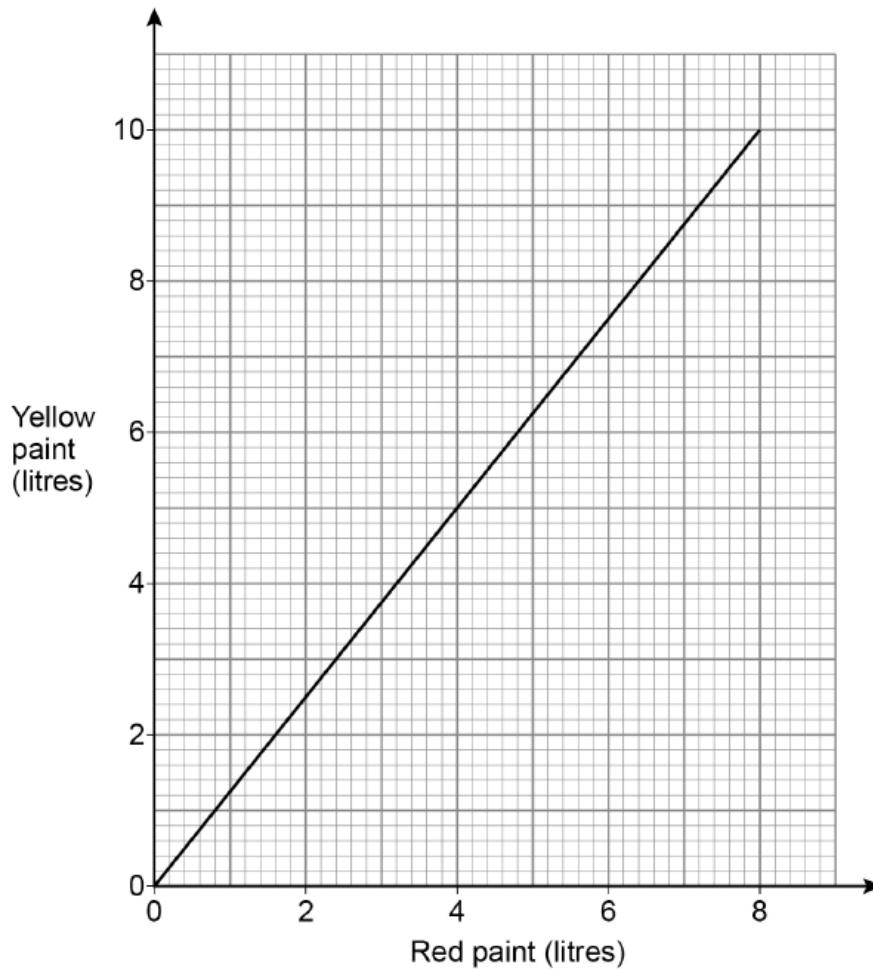
[3 marks]

Answer _____

Turn over for the next question



- 4 Ola and Pip make orange paint by mixing red paint and yellow paint.
The graph shows how much of each colour paint to use.



- 4 (a) Ola uses 5 litres of yellow paint.
Write down how much **red** paint Ola **uses**.

[1 mark]

Answer _____ litres

- 4 (b) Pip uses 10 litres of yellow paint.
How much **orange** paint does Pip **make**?

[2 marks]

Answer _____ litres



- 5 A number is divided by 8
The answer is 43 remainder 5
Work out the number.

[3 marks]

Answer _____

- 6 Quin buys 200 toys for £4 each.
He sells the toys for £5 each.
What is the **least** number of toys he must sell to make a profit?

[3 marks]

Answer _____



7 Vinyl records cost £25 each.

Offer
Buy one and get another for half price

Arif wants to buy **two** vinyl records.
He saves £8 every Saturday.

7 (a) Assume the offer is permanent.

How many Saturdays does Arif need to save for?
You **must** show your working.

[3 marks]

Answer _____



7 (b) In fact, the offer is only for 1 week and there are no new offers.

What does this mean about the number of Saturdays he needs to save for?

Tick **one** box.

[1 mark]

It is less than the answer to part (a)

It is the same as the answer to part (a)

It is greater than the answer to part (a)

It is not possible to tell

8 Here is a list of ingredients for lentil soup.

Lentil soup for 4 people	
Lentils	170 g
Water	600 ml
Onion	50 g

How many grams of lentils are needed to make this soup for 10 people?

[3 marks]

Answer _____ g

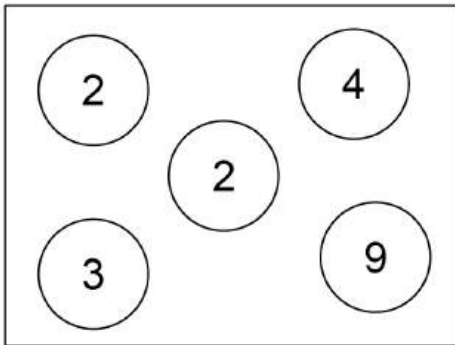
7

Turn over ►

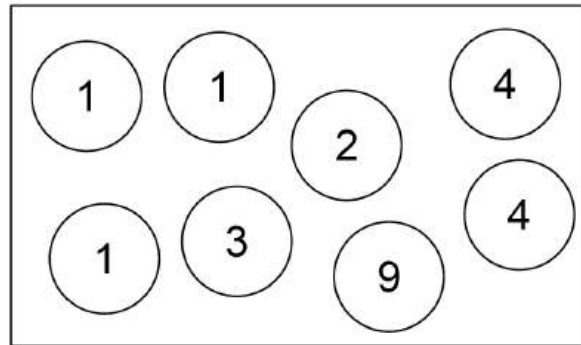


- 9 Numbered discs are in two boxes.

Box A



Box B



- 9 (a) Work out the ratio

total value of the numbers in **Box A** : total value of the numbers in **Box B**

Give your answer in its simplest form.

[3 marks]

Answer _____ : _____

- 9 (b) One disc is picked at random from **Box A**.

Write down the probability that the number on the disc is greater than 6

[1 mark]

Answer _____



10 Work out the value of $2(a^2 + 3a)$ when $a = 4$

[3 marks]

Answer _____

11 In this question use a pair of compasses.
The line shown is the **diameter** of a circle, centre X.
Draw the circle.

[1 mark]



Turn over for the next question



12 (a)

One day,

- a company runs 240 trains
- $\frac{1}{8}$ of these trains are late.

The company is charged £350 for each late train.

How much is the company charged that day?

[3 marks]

Answer £ _____

12 (b)

Hot drinks are sold at a station in the ratio

tea : coffee : hot chocolate = 3 : 5 : 2

2600 hot drinks are sold.

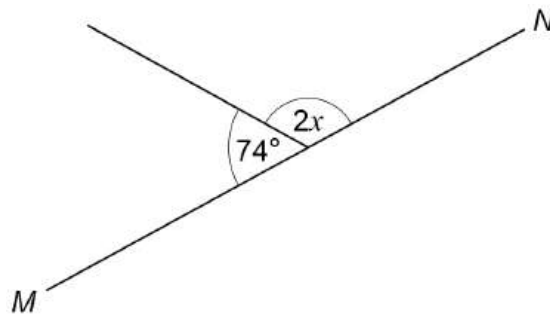
How many coffees are sold?

[3 marks]

Answer _____



13

 MN is a straight line.Not drawn
accuratelyWork out the value of x .**[3 marks]**

Answer _____^o

Turn over for the next question

Turn over ►



14 (a) By rounding each number to 1 significant figure, estimate the value of

$$1.98 \times 3.82 + 6.75^2$$

You **must** show your working.

[3 marks]

Answer _____

14 (b) Is your answer to part (a) an overestimate or an underestimate?

Tick **one** box.

Overestimate

Underestimate

Give a reason for your answer.

[1 mark]



15 (a) A sphere has diameter 20 cm

Show that the radius of the sphere is 10 cm

[1 mark]

15 (b) The volume of a sphere is $\frac{4}{3}\pi r^3$ where r is the radius.

Work out the volume of a sphere with **diameter** 20 cm

Give your answer in terms of π

[2 marks]

Answer _____ cm³

Turn over for the next question

7

Turn over ►



16 (a)

$$d = \frac{800}{w}$$

- d represents the number of days to complete a job.
- w represents the number of workers needed.

Assume the job needs completing in 20 days.

How many workers are needed?

[3 marks]

Answer _____

16 (b) In fact, the job needs completing in **fewer** than 20 days.

What does this mean about the number of workers that are needed?

Tick **one** box.

[1 mark]

It is less than the answer to part (a)

It is the same as the answer to part (a)

It is greater than the answer to part (a)



17

A chord is drawn on a circle.

Which statement is correct?

Tick **one** box.

[1 mark]

The chord must be longer than the radius.

The chord must be equal in length to the radius.

The chord must be shorter than the radius.

The chord could be longer than, equal in length to or shorter than the radius.

18

A metal solid has volume 11 cm^3

The density of the metal is 8.5 g/cm^3

Work out the mass of the solid.

[2 marks]

Answer _____ g

7

Turn over ►



19

The table shows information about the marks of students in a test.

	Mean mark	Range of marks
School A	61	14
School B	56	21

Tick **one** box for each statement.

[3 marks]

	True	May be true	Not true
On average, School A had higher marks	<input type="checkbox"/>	<input type="checkbox"/>	<input type="checkbox"/>
There are more students in School B	<input type="checkbox"/>	<input type="checkbox"/>	<input type="checkbox"/>
School B had a greater spread of marks	<input type="checkbox"/>	<input type="checkbox"/>	<input type="checkbox"/>



- 20 (a)** Work out $0.6 \div 100$
Give your answer in standard form.

[2 marks]

Answer _____

- 20 (b)** Work out $40 \times 30 \times 10^5$
Give your answer in standard form.

[2 marks]

Answer _____

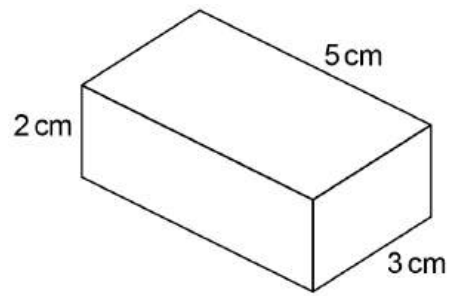
Turn over for the next question

7

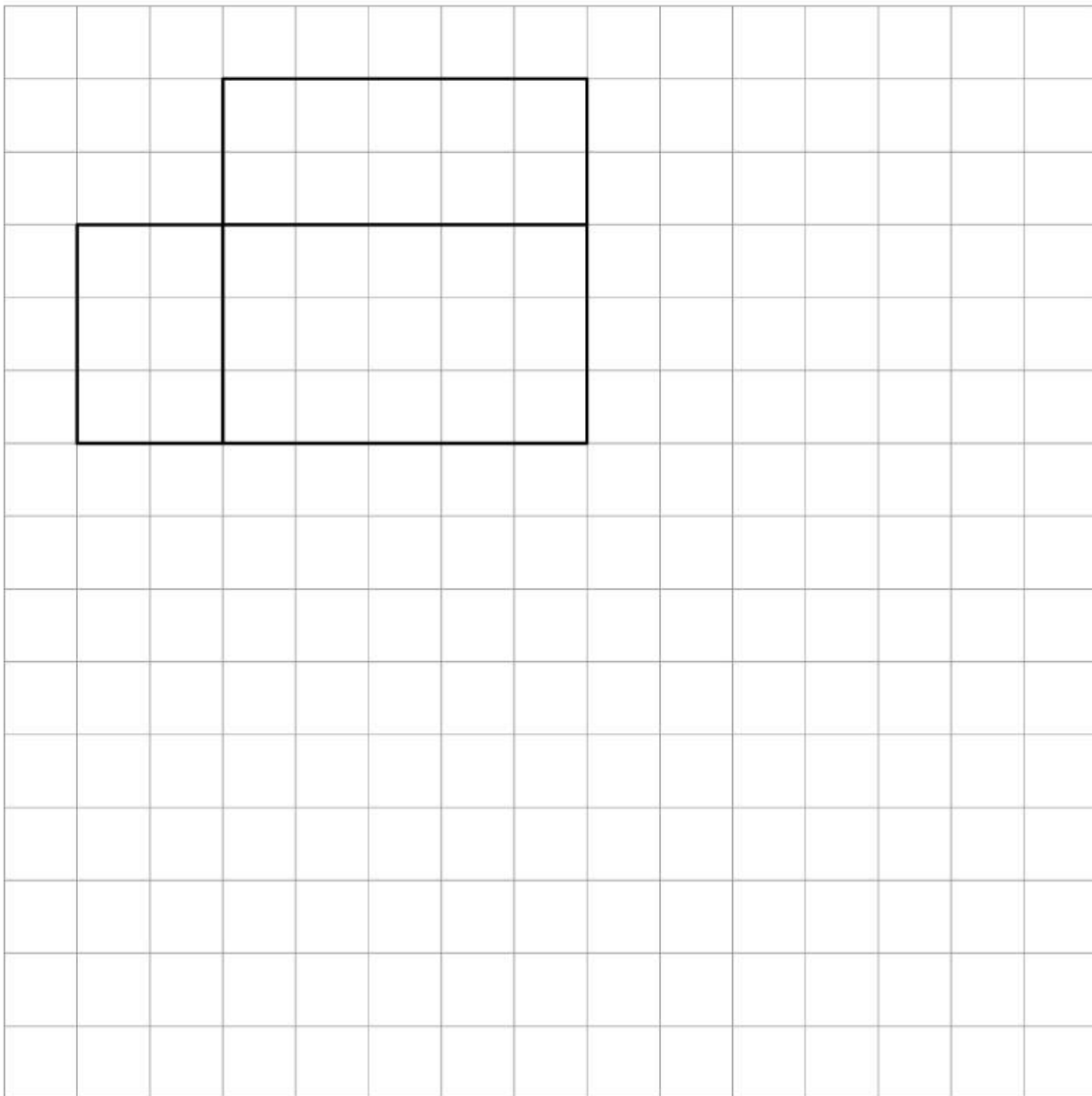
Turn over ►

21

Here is a cuboid.



Complete the drawing of the net on the centimetre grid.

[2 marks]

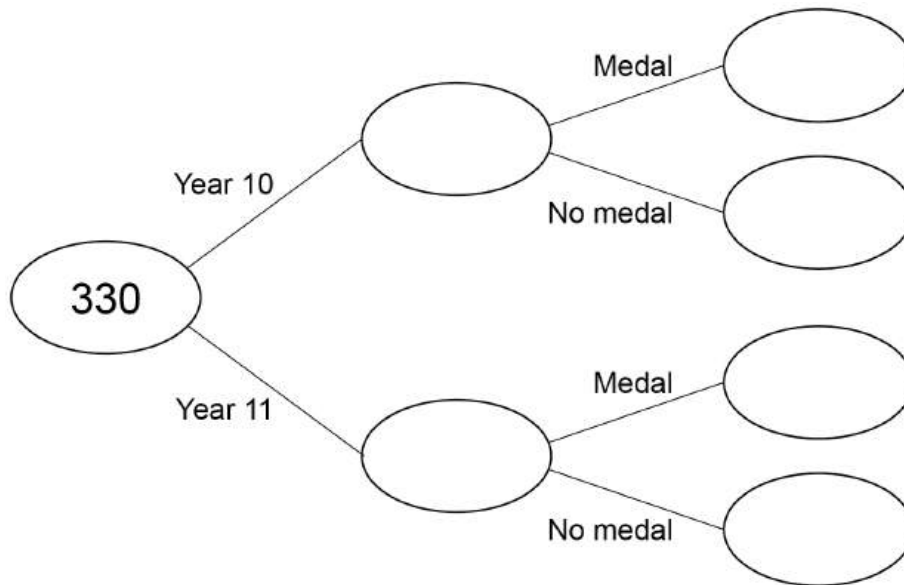
22

330 students from Year 10 and Year 11 take part in a competition.

- number of students in Year 10 : number of students in Year 11 = 1 : 2
- 125 students win a medal.
- 73 of the students who win a medal are in Year 11

Complete the frequency tree.

[4 marks]



Turn over for the next question

Turn over ►



23 Work out $\frac{4}{15} + \frac{1}{5} \div \frac{1}{2}$

Give your answer as a fraction.

[3 marks]

Answer _____

24 $y = \frac{1}{x}$

Which of these values of x gives the **greatest** value of y ?

Circle your answer.

[1 mark]

$$\frac{9}{20}$$

$$\frac{2}{5}$$

-80

95



25 Circle the value of $\sin 90^\circ$

[1 mark]

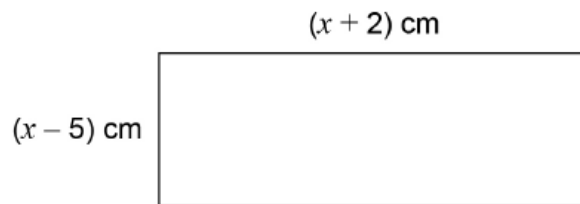
0

$\frac{1}{2}$

$\frac{\sqrt{3}}{2}$

1

26



Not drawn
accurately

The area of the rectangle is 120 cm^2

Work out the value of x .

[4 marks]

$x =$ _____

END OF QUESTIONS



There are no questions printed on this page

*Do not write
outside the
box*

**DO NOT WRITE ON THIS PAGE
ANSWER IN THE SPACES PROVIDED**



There are no questions printed on this page

*Do not write
outside the
box*

**DO NOT WRITE ON THIS PAGE
ANSWER IN THE SPACES PROVIDED**

Copyright information

For confidentiality purposes, all acknowledgements of third-party copyright material are published in a separate booklet. This booklet is published after each live examination series and is available for free download from www.aqa.org.uk.

Permission to reproduce all copyright material has been applied for. In some cases, efforts to contact copyright-holders may have been unsuccessful and AQA will be happy to rectify any omissions of acknowledgements. If you have any queries please contact the Copyright Team.

Copyright © 2025 AQA and its licensors. All rights reserved.



2 8



2 5 6 G 8 3 0 0 / 1 F

IB/M/Jun25/8300/1F