

Please write clearly in block capitals.

Centre number

Candidate number

Surname _____

Forename(s) _____

Candidate signature _____

I declare this is my own work.

GCSE MATHEMATICS

F


Foundation Tier Paper 3 Calculator

Wednesday 11 June 2025 Morning Time allowed: 1 hour 30 minutes

Materials

For this paper you must have:

- a calculator
- mathematical instruments
- the Formulae Sheet (enclosed).



Instructions

- Use black ink or black ball-point pen. Draw diagrams in pencil.
- Fill in the boxes at the top of this page.
- Answer **all** questions.
- You must answer the questions in the spaces provided. Do not write outside the box around each page or on blank pages.
- If you need extra space for your answer(s), use the lined pages at the end of this book. Write the question number against your answer(s).
- Do all rough work in this book. Cross through any work you do not want to be marked.

Information

- The marks for questions are shown in brackets.
- The maximum mark for this paper is 80.
- You may ask for more answer paper, graph paper and tracing paper. These must be tagged securely to this answer book.

Advice

In all calculations, show clearly how you work out your answer.

For Examiner's Use

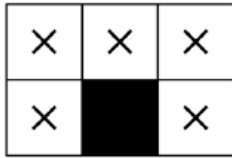
Pages	Mark
2–3	
4–5	
6–7	
8–9	
10–11	
12–13	
14–15	
16–17	
18–19	
20–21	
22–23	
24–25	
TOTAL	



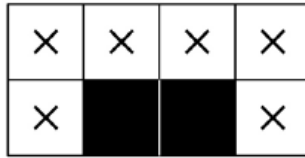
Answer **all** questions in the spaces provided.

Do not write
outside the
box

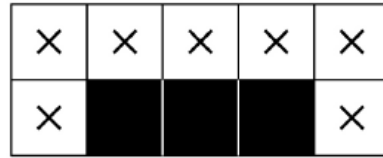
- 1** Here are the first three patterns in a sequence.



Pattern 1



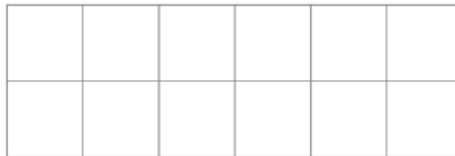
Pattern 2



Pattern 3

- 1 (a)** Draw Pattern 4 on the grid.

[1 mark]



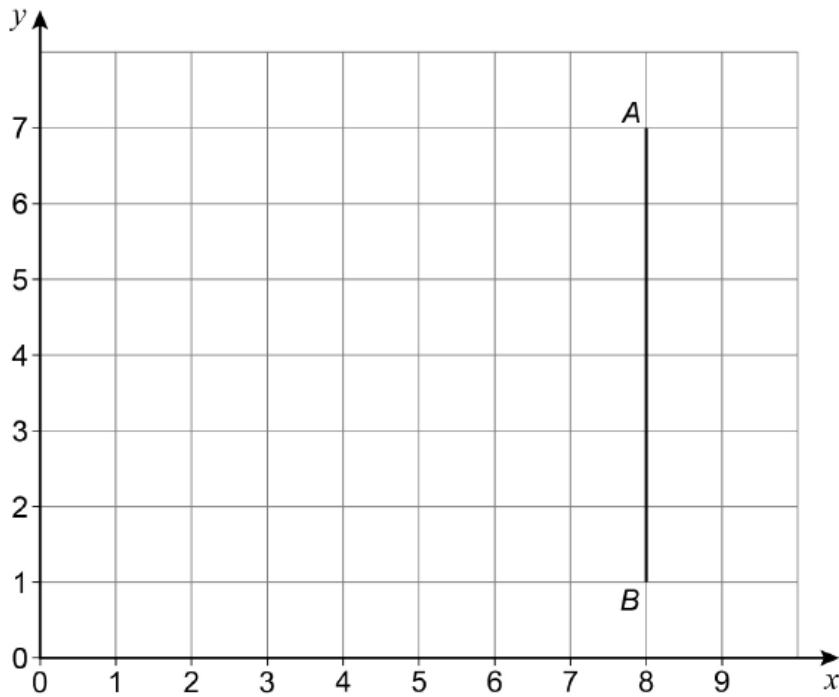
- 1 (b)** How many squares in Pattern 6 would have a cross (X) in them?

[2 marks]

Answer _____



2 Line AB is on a grid.



2 (a) Write down the coordinates of B .

[1 mark]

Answer (_____ , _____)

2 (b) Write down the coordinates of the midpoint of the line AB .

[1 mark]

Answer (_____ , _____)



- 3 (a) Jodie makes a sandwich using one type of bread and one filling.

Bread	Filling
White (W) or Brown (B)	Cheese (C) or Ham (H) or Tuna (T)

Complete the table of the 6 possible sandwiches they could make.
One has been done for you.

[2 marks]

WC

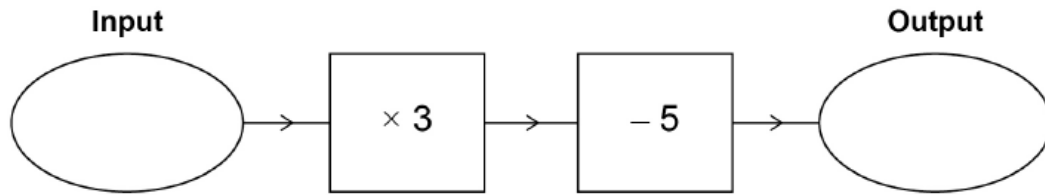
- 3 (b) What **fraction** of the possible sandwiches use Cheese?

[1 mark]

Answer _____



4 Here is a number machine.



4 (a) Work out the **output** when the input is 4

[1 mark]

Answer _____

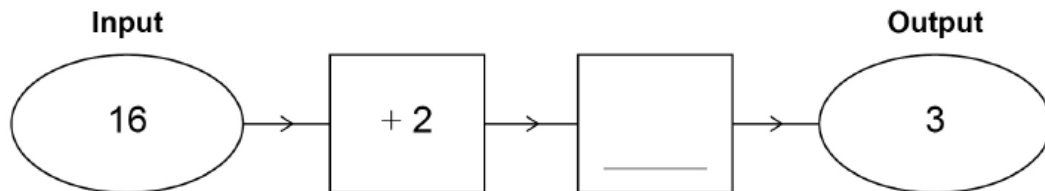
4 (b) Work out the **input** when the output is 19

[2 marks]

Answer _____

4 (c) Complete this number machine.

[1 mark]



Turn over ►



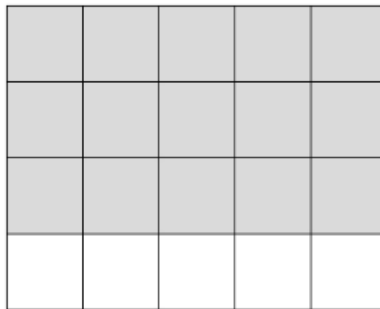
- 5 (a) Complete the table to show equivalent fractions, decimals and percentages.

[3 marks]

Fraction	Decimal	Percentage
	0.5	50%
$\frac{1}{10}$		10%
$\frac{2}{5}$	0.4	

- 5 (b) What **percentage** of this grid is shaded?

[1 mark]



Answer _____ %



6 Which metric unit would be **most** suitable for each measurement?

Tick **one** box for each.

[3 marks]

	centimetres (cm)	metres (m)	kilometres (km)
Distance between two villages	<input type="checkbox"/>	<input type="checkbox"/>	<input type="checkbox"/>
Length of a pencil	<input type="checkbox"/>	<input type="checkbox"/>	<input type="checkbox"/>
Height of a building	<input type="checkbox"/>	<input type="checkbox"/>	<input type="checkbox"/>

Turn over for the next question

Turn over ►



7 A mobile phone company has two different plans.

<p>Plan A</p> <p>Phone £500</p> <p>plus</p> <p>£11 per month for 24 months</p>
--

<p>Plan B</p> <p>Phone is free</p> <p>plus</p> <p>£35 per month for 24 months</p>

7 (a) Show that the **total** cost of Plan A for 24 months is £764

[2 marks]

7 (b) During a sale, the **total** cost of Plan B is reduced by 10%

Which plan is cheaper for 24 months during the sale?

Tick a box.

Plan A

Plan B

Show working to support your answer.

[3 marks]



- 8** One burger costs £3.80
Two burgers and **three** hotdogs cost £15.85
Work out the cost of **one** hot dog.

[3 marks]

Answer £ _____

Turn over for the next question



- 9 (a) The square of a **whole** number is a two-digit number.

Work out

the **smallest** number that could have been squared
and
the **largest** number that could have been squared.

[3 marks]

smallest _____

largest _____

- 9 (b) Which has the **larger** value 0.8^2 or 0.8^3 ?

Tick a box.

0.8^2

0.8^3

Give a reason for your answer.

[1 mark]



10 (a) £4.56 is paid using the smallest possible number of coins.

What is the **modal value** of the coins used?

You **must** show your working.

[2 marks]

Answer _____

10 (b) Here is a list of five numbers.

5 9 4 16 8

An extra number is put into the list.

The **median** of the numbers is now 7

Work out the extra number.

[2 marks]

Answer _____



11

Paul buys plates for his cafe.

The cafe has 20 tables.

He buys 6 plates for each table plus an extra 70% for spares.

Work out how many plates Paul buys in **total**.

[3 marks]

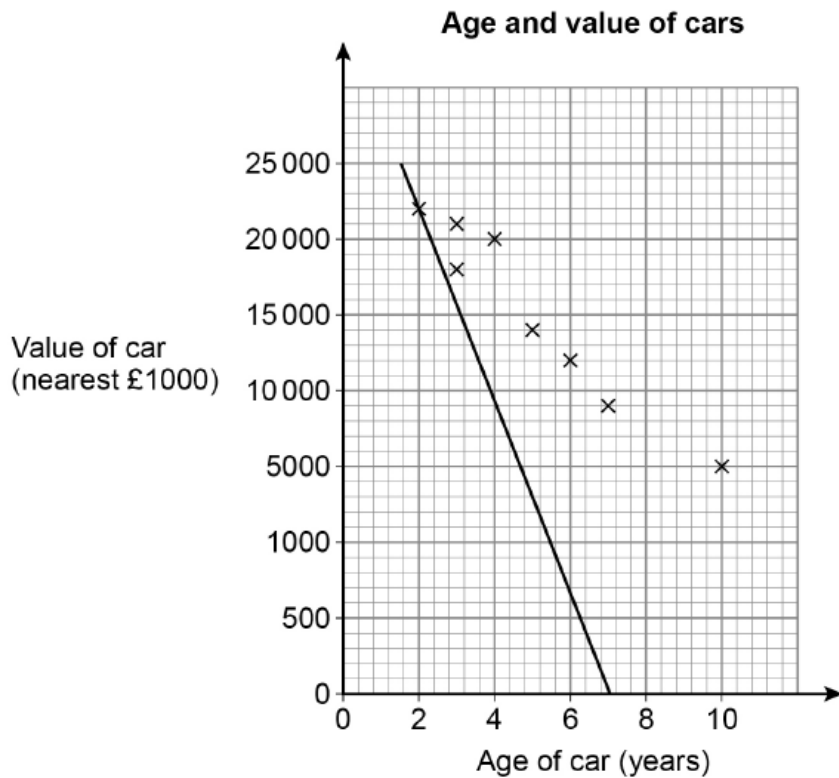
Answer _____



12 The table shows the age and value of some cars.

Age of car (years)	2	3	3	4	5	6	7	10
Value of car (nearest £1000)	22000	21000	18000	19000	14000	12000	9000	5000

Anil draws this scatter diagram and line of best fit for the data.



Write down **two** mistakes he has made.

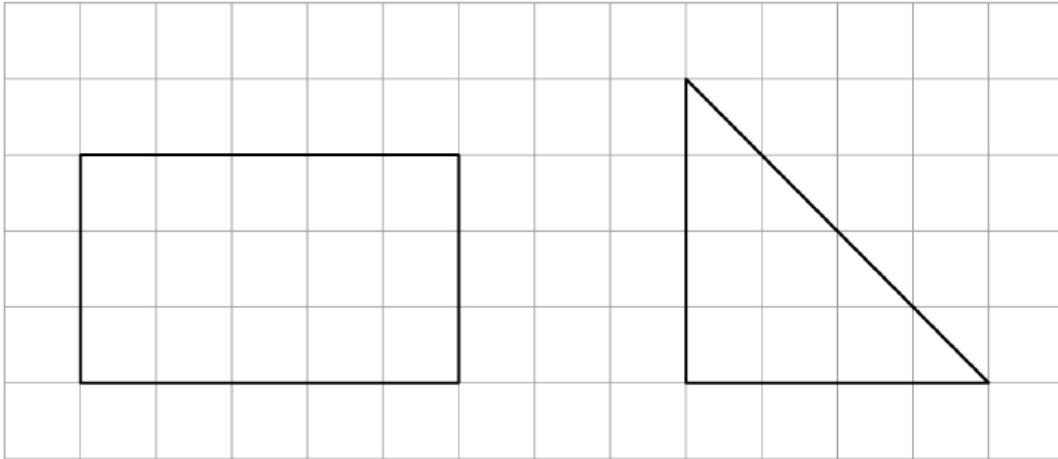
[2 marks]

Mistake 1 _____

Mistake 2 _____



- 13** A rectangle and a triangle are drawn on a square grid.



Work out the ratio area of rectangle : area of triangle

[3 marks]

Answer _____ : _____



- 14** A box contains cards that are either red, blue, green or yellow.

Colour	Red	Blue	Green	Yellow
Probability	0.1	0.24		

- 14 (a)** $P(\text{green}) = P(\text{yellow})$

Complete the table.

[2 marks]

- 14 (b)** There are 600 cards in the box.
How many cards are **not** blue?

[3 marks]

Answer _____



15 A and B are triangles.

For each statement, tick the correct box to describe A and B.

[3 marks]

	Always congruent	Sometimes congruent	Never congruent
A's sides are the same lengths as B's sides	<input type="checkbox"/>	<input type="checkbox"/>	<input type="checkbox"/>
A's angles are the same as B's angles	<input type="checkbox"/>	<input type="checkbox"/>	<input type="checkbox"/>
A is an enlargement of B with scale factor 2	<input type="checkbox"/>	<input type="checkbox"/>	<input type="checkbox"/>



- 17** Sid and Zak each throw the same biased coin.
Here is some information about their throws.

Sid	80 throws	Relative frequency of Heads is 0.75
Zak	120 throws	72 are Heads

- 17 (a)** Work out the relative frequency of Heads for the **200** throws.

[2 marks]

Answer _____

- 17 (b)** Which results would give the **best** estimate of the probability of Heads?

Tick **one** box.

Sid's 80
throws

Zak's 120
throws

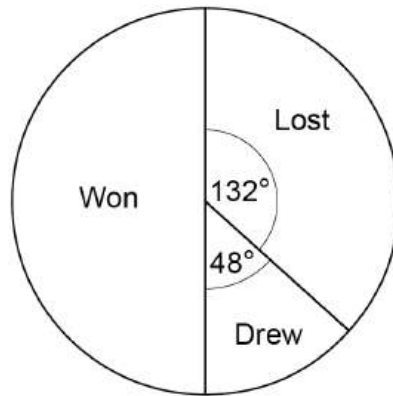
All 200 throws

Give a reason for your answer.

[1 mark]



- 18 The pie chart represents the results of matches played by a team.



30 matches were **won**.

How many matches were lost?

[3 marks]

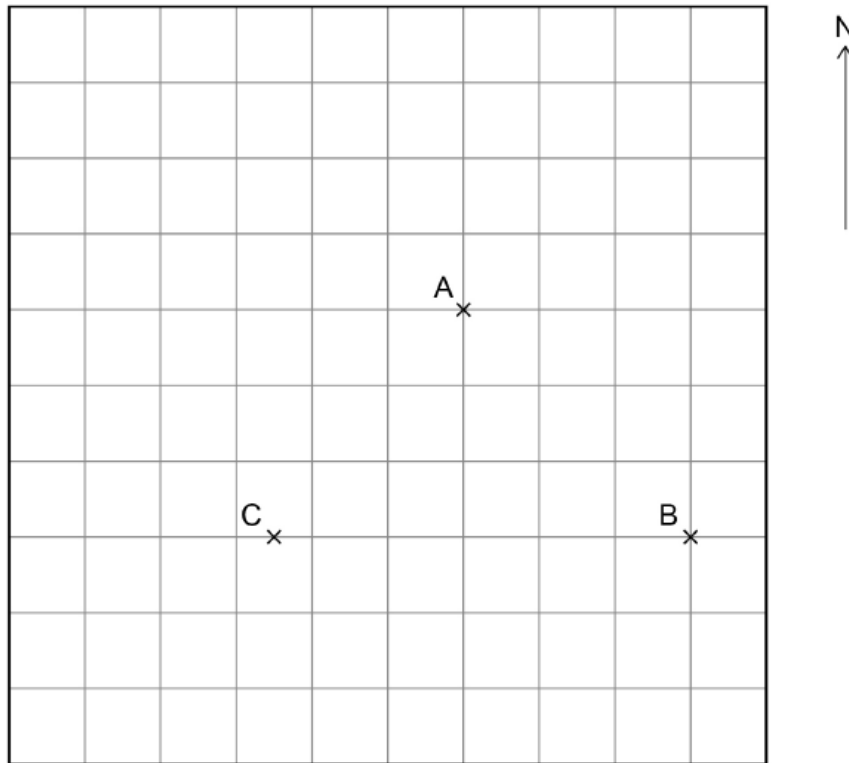
Answer _____

Turn over for the next question



- 19 Here is a scale diagram showing towns A, B and C on a centimetre grid.

Scale 1 : 200 000



- 19 (a) Work out the **actual** distance from B to C.
Give your answer in kilometres.

[4 marks]

Answer _____ km



19 (b) B is South East of A.

Write down the bearing of B from A.

[1 mark]

Answer _____ °

20 A linear sequence has

- 2nd term = 6
- 5th term = 18

Work out the n th term of the sequence.

[3 marks]

Answer _____

Turn over for the next question



21

Ary, Bea and Cat each have an amount of money.

Cat has £280

- Cat's amount is $\frac{2}{3}$ of Bea's amount.
- Ary's amount : Bea's amount = 5 : 12

Work out how much money Ary has.

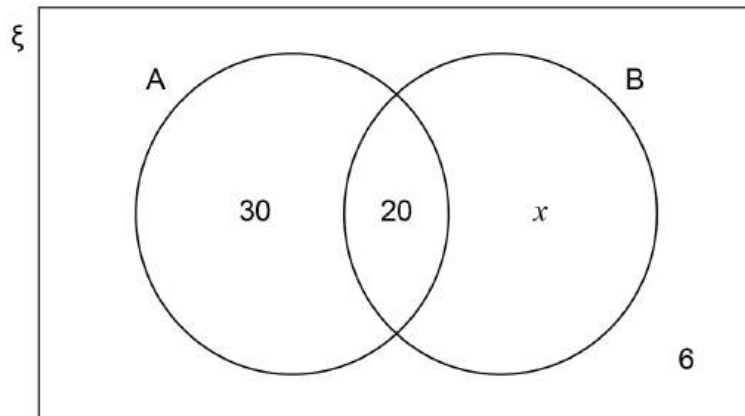
[3 marks]

Answer £ _____



22

The Venn diagram shows some of the **numbers** of items in each set.



$$P(A) = \frac{1}{2}$$

Work out the value of x .

[2 marks]

$$x = \underline{\hspace{10em}}$$

Turn over for the next question

Turn over ►



24 (a) Write down the equation of a straight line parallel to $y - 2x = 9$

[1 mark]

Answer _____

24 (b) A straight line

- has gradient 5
- passes through the point (3, 7)

Circle the equation of the line.

[1 mark]

$$y = 3x - 2$$

$$y = 3x + 7$$

$$y = 5x$$

$$y = 5x - 8$$

END OF QUESTIONS



There are no questions printed on this page

*Do not write
outside the
box*

**DO NOT WRITE ON THIS PAGE
ANSWER IN THE SPACES PROVIDED**



