

Please write clearly in block capitals.

Centre number

Candidate number

Surname _____

Forename(s) _____

Candidate signature _____

I declare this is my own work.

GCSE MATHEMATICS

H


Higher Tier Paper 1 Non-Calculator

Thursday 15 May 2025 Morning Time allowed: 1 hour 30 minutes

Materials

For this paper you must have:

- mathematical instruments
- the Formulae Sheet (enclosed).



You must **not** use a calculator.

Instructions

- Use black ink or black ball-point pen. Draw diagrams in pencil.
- Fill in the boxes at the top of this page.
- Answer **all** questions.
- You must answer the questions in the spaces provided. Do not write outside the box around each page or on blank pages.
- If you need extra space for your answer(s), use the lined pages at the end of this book. Write the question number against your answer(s).
- Do all rough work in this book. Cross through any work you do not want to be marked.

Information

- The marks for questions are shown in brackets.
- The maximum mark for this paper is 80.
- You may ask for more answer paper, graph paper and tracing paper. These must be tagged securely to this answer book.

Advice

In all calculations, show clearly how you work out your answer.

For Examiner's Use	
Pages	Mark
2–3	
4–5	
6–7	
8–9	
10–11	
12–13	
14–15	
16–17	
18–19	
20–21	
22–23	
TOTAL	



Answer **all** questions in the spaces provided.**1** Solve the simultaneous equations

$$2x + 5y = 18$$

$$2x + y = 6$$

[3 marks]

$$x = \underline{\hspace{2cm}} \quad y = \underline{\hspace{2cm}}$$

2 $1.07 < \frac{x}{9} < 1.17$ where x is an **integer**.Work out the value of x .**[2 marks]**

$$x = \underline{\hspace{2cm}}$$



3

A metal solid has volume 11 cm^3

The density of the metal is 8.5 g/cm^3

Work out the mass of the solid.

[2 marks]

Answer _____ g

4

Here are 11 numbers.

2 8 10 12 12 14 19 23 26 31 33

Work out the inter-quartile range.

[2 marks]

Answer _____



- 5 The table shows information about the marks of students in a test.

	Mean mark	Range of marks
School A	61	14
School B	56	21

Tick **one** box for each statement.

[3 marks]

	True	May be true	Not true
On average, School A had higher marks	<input type="checkbox"/>	<input type="checkbox"/>	<input type="checkbox"/>
There are more students in School B	<input type="checkbox"/>	<input type="checkbox"/>	<input type="checkbox"/>
School B had a greater spread of marks	<input type="checkbox"/>	<input type="checkbox"/>	<input type="checkbox"/>



- 6 (a)** Work out $0.6 \div 100$
Give your answer in standard form.

[2 marks]

Answer _____

- 6 (b)** Work out $40 \times 30 \times 10^5$
Give your answer in standard form.

[2 marks]

Answer _____

Turn over for the next question

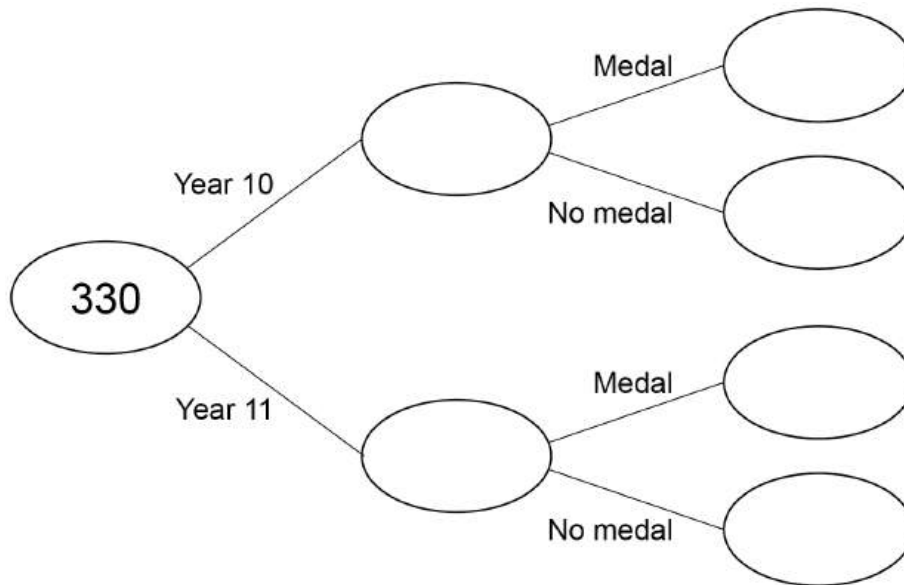
7

330 students from Year 10 and Year 11 take part in a competition.

- number of students in Year 10 : number of students in Year 11 = 1 : 2
- 125 students win a medal.
- 73 of the students who win a medal are in Year 11

Complete the frequency tree.

[4 marks]





8 Work out $\frac{4}{15} + \frac{1}{5} \div \frac{1}{2}$

Give your answer as a fraction.

[3 marks]

Answer _____

Turn over for the next question

7

Turn over ►



9

$$y = \frac{1}{x}$$

Which of these values of x gives the **greatest** value of y ?

Circle your answer.

[1 mark]

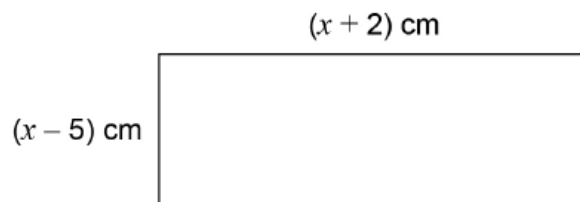
$$\frac{9}{20}$$

$$\frac{2}{5}$$

-80

95

10



Not drawn
accurately

The area of the rectangle is 120 cm^2

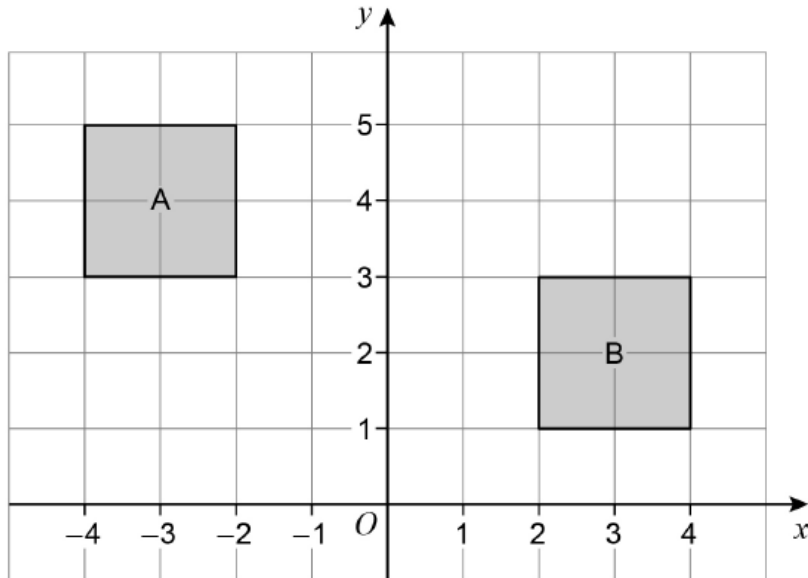
Work out the value of x .

[4 marks]

$$x = \underline{\hspace{10em}}$$



11



- 11 (a) Write down the **translation vector** that maps shape A to shape B.

[1 mark]

Answer $\left(\begin{array}{c} \\ \end{array} \right)$

- 11 (b) Describe fully a **rotation** that maps A to B.

[2 marks]



- 12** Oscar and Nikita share some money in the ratio 8 : 5
Oscar has £27 **more** than Nikita.
How much do they have altogether?

[3 marks]

Answer £ _____

- 13** c and d are **consecutive cube numbers**, where $c < 4.5^3 < d$
Work out the value of $d - c$

[2 marks]

Answer _____



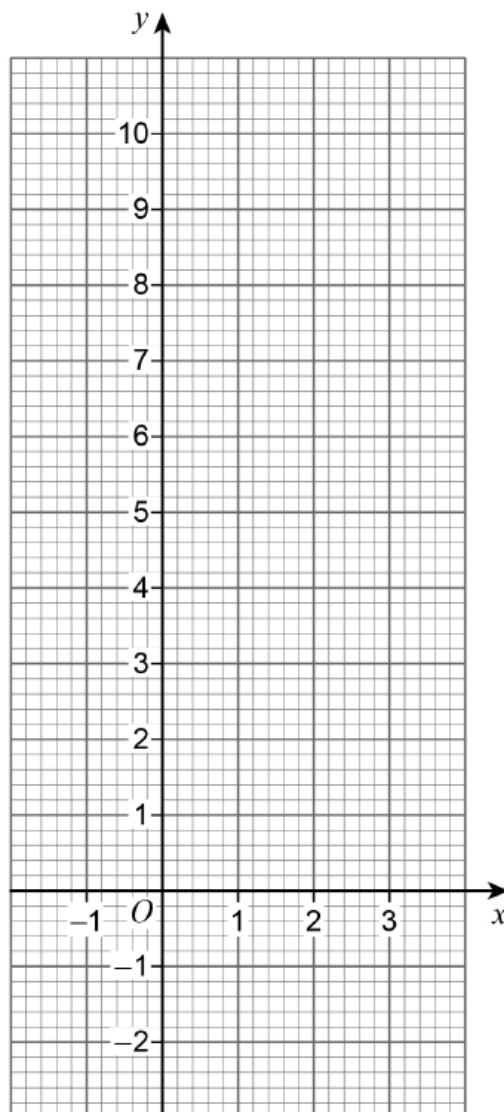
14 (a) Complete the table of values for $y = 2^x$

[2 marks]

x	-1	0	1	2	3
y		1		4	

14 (b) Draw the graph of $y = 2^x$ for values of x from -1 to 3

[2 marks]

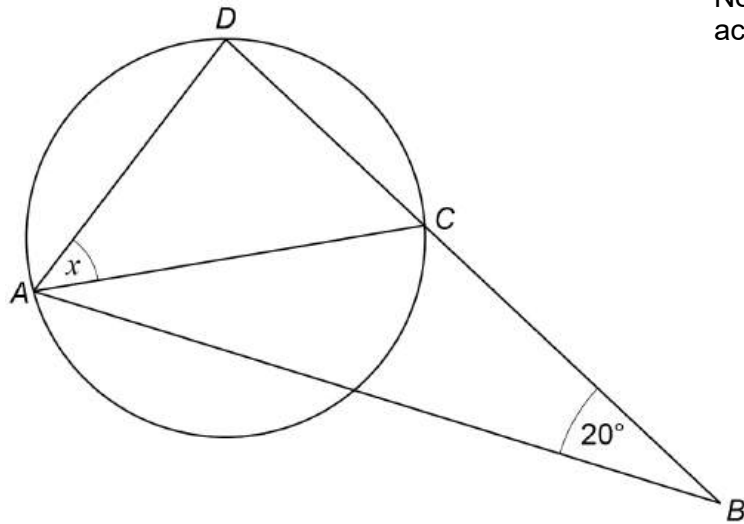


15

A , C and D are points on a circle, diameter AC .

ABC is an isosceles triangle with $AC = BC$

BCD is a straight line.



Not drawn
accurately

Work out the size of angle x .

[4 marks]

$$x = \underline{\hspace{2cm}}^\circ$$



16

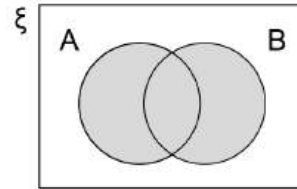
A and B are two events.

Match each box on the left to the correct **shaded** area on the Venn diagrams.

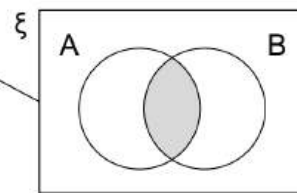
One has been done for you.

[3 marks]

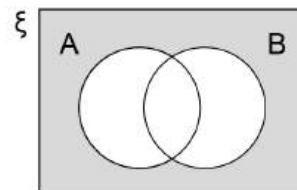
$$A \cap B$$



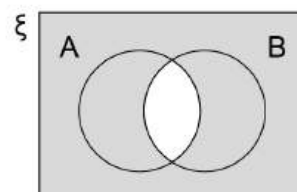
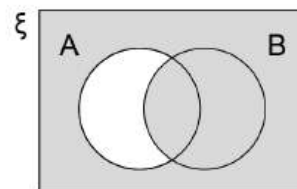
$$A \cup B$$



$$A' \cup B$$



$$A' \cap B'$$



7

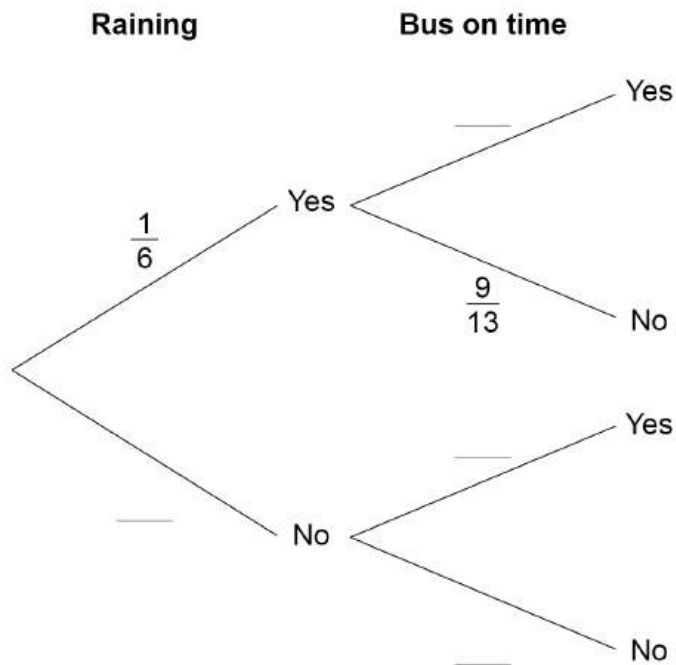
Turn over ►



- 17** A bus is due to arrive at a bus stop at 1 pm
The probability that the bus is on time is **halved** when it is raining.

- 17 (a)** Complete the tree diagram.

[2 marks]



- 17 (b)** Work out the probability that at 1 pm it is raining and the bus is **not** on time.

[2 marks]

Answer _____



19 (a) Work out the value of $\left(\frac{9}{16}\right)^{-\frac{3}{2}}$

[3 marks]

Answer _____

19 (b) $\sqrt{125} = 5^n$

Work out the value of n .

[2 marks]

$n =$ _____



20 Express $\sqrt{44} + \sqrt{99} + \sqrt{275}$ in the form $a\sqrt{n}$ where a and n are integers.

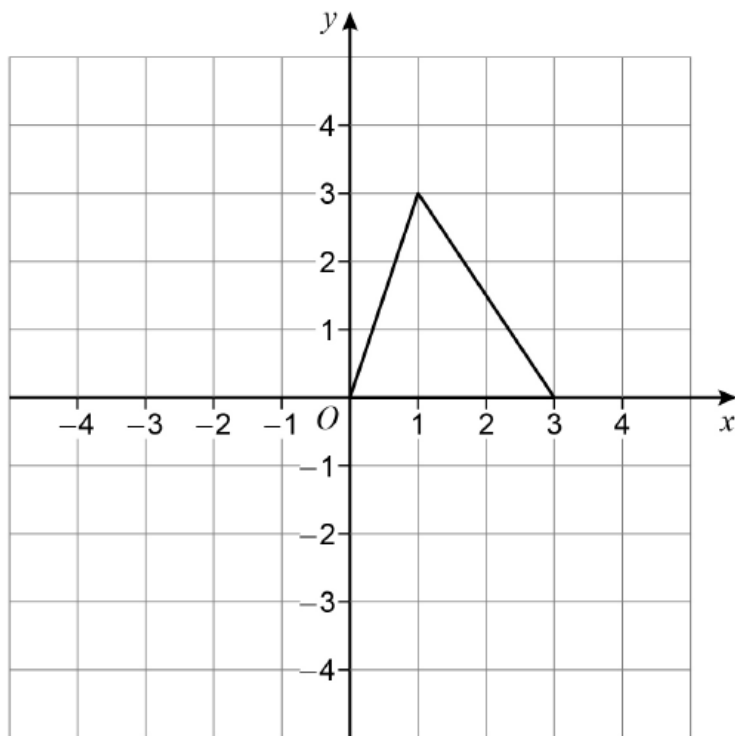
[3 marks]

Answer _____

Turn over for the next question

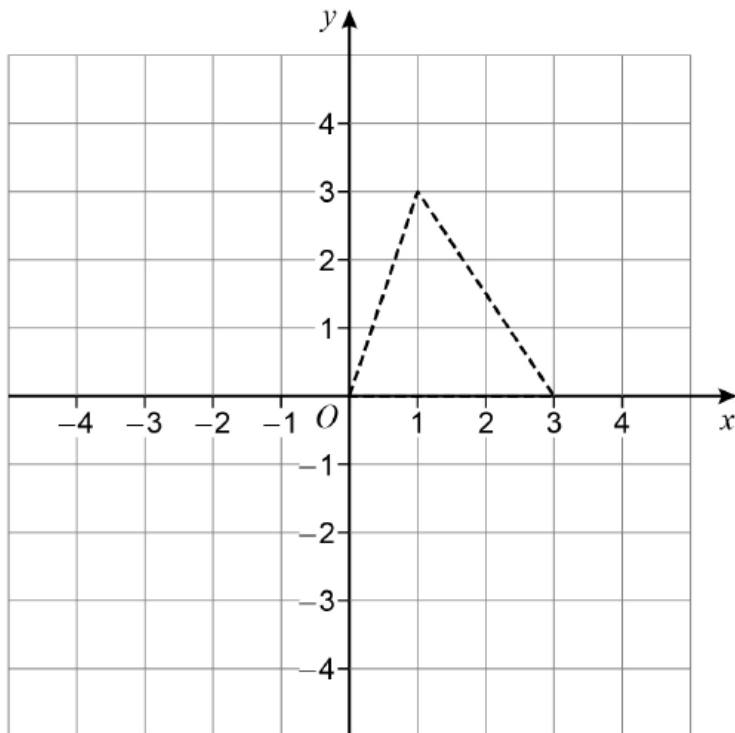


- 21 The graph of $y = f(x)$ for $0 \leq x \leq 3$ is shown.

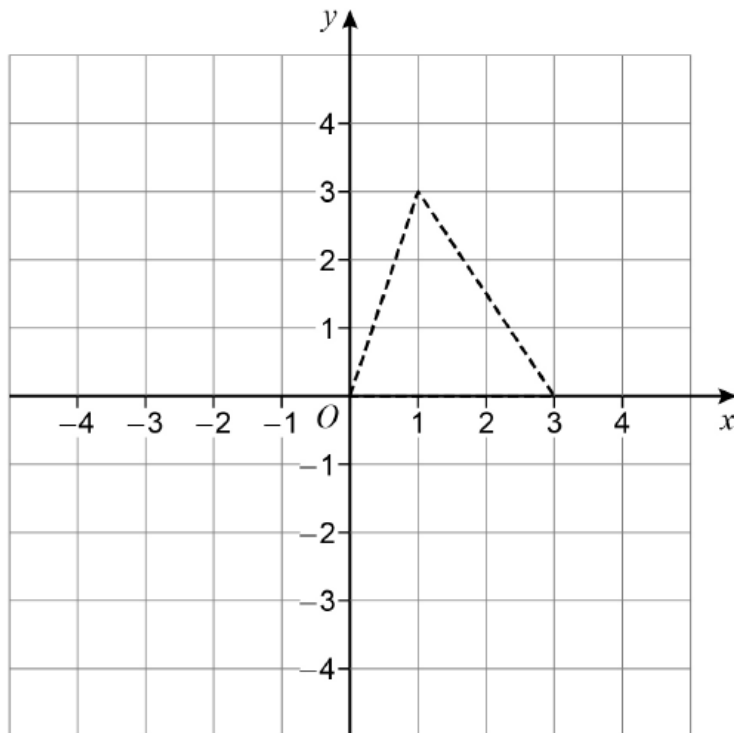


- 21 (a) On the grid below, draw the graph of $y = -f(x)$ for $0 \leq x \leq 3$.
The graph of $y = f(x)$ is shown to help you.

[1 mark]



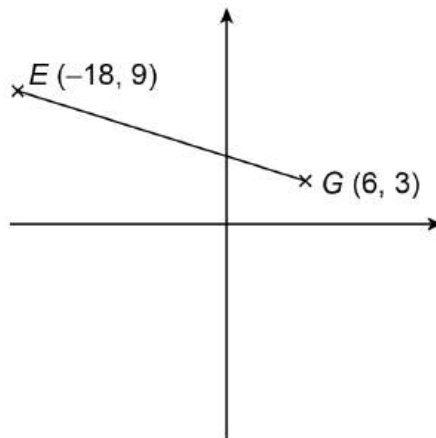
- 21 (b)** On the grid below, draw the graph of $y = f(x) + 1$ for $0 \leq x \leq 3$
The graph of $y = f(x)$ is shown to help you.

[1 mark]

Turn over for the next question



22

Here is a sketch of straight line EG .

F is a point on EG such that $EF = \frac{1}{3} EG$

Work out the coordinates of F .

[3 marks]

Answer (_____ , _____)



23 (a) Write $x^2 + 12x + 50$ in the form $(x + a)^2 + b$ where a and b are integers.

[2 marks]

Answer _____

23 (b) A curve has the equation $y = (x - 3)^2 - 8$

Write down the coordinates of the turning point of the curve.

[2 marks]

Answer (_____ , _____)

Turn over for the next question



There are no questions printed on this page

*Do not write
outside the
box*

**DO NOT WRITE ON THIS PAGE
ANSWER IN THE SPACES PROVIDED**



There are no questions printed on this page

*Do not write
outside the
box*

**DO NOT WRITE ON THIS PAGE
ANSWER IN THE SPACES PROVIDED**

Copyright information

For confidentiality purposes, all acknowledgements of third-party copyright material are published in a separate booklet. This booklet is published after each live examination series and is available for free download from www.aqa.org.uk.

Permission to reproduce all copyright material has been applied for. In some cases, efforts to contact copyright-holders may have been unsuccessful and AQA will be happy to rectify any omissions of acknowledgements. If you have any queries please contact the Copyright Team.

Copyright © 2025 AQA and its licensors. All rights reserved.

