

Answer ALL questions. Write your answers in the spaces provided. You must write down all the stages in your working.

- 1 The table gives information about the number of kilometres that Ted cycled on each of the 30 days in April.

Number of kilometres (K)	Frequency
$0 \leq K < 5$	8
$5 \leq K < 10$	7
$10 \leq K < 15$	3
$15 \leq K < 20$	10
$20 \leq K < 25$	2

Calculate an estimate for the mean number of kilometres that Ted cycled on each day in April.

..... kilometres

(Total for Question 1 is 4 marks)

DO NOT WRITE IN THIS AREA

DO NOT WRITE IN THIS AREA

DO NOT WRITE IN THIS AREA



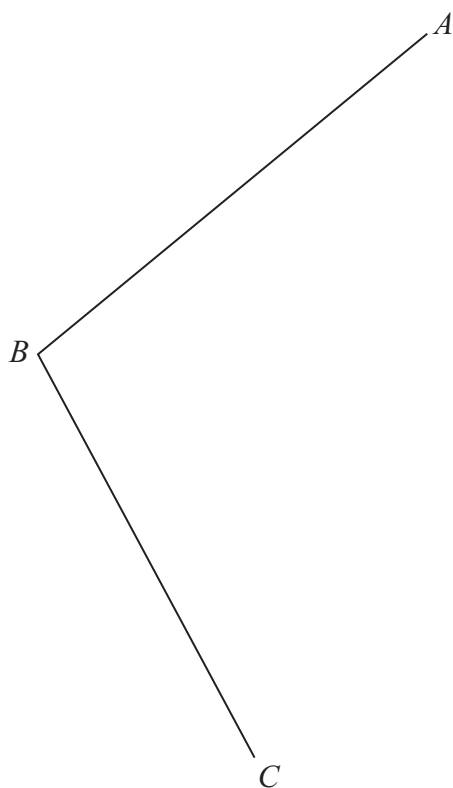
- 2 By rounding each number to one significant figure, work out an estimate for the value of

$$\frac{2.11^2 \times 58.9}{\sqrt{8.859}}$$

Show your working clearly.

(Total for Question 2 is 2 marks)

- 3 Using ruler and compasses only, construct the bisector of angle ABC
Show all your construction lines.



(Total for Question 3 is 2 marks)



4 e, f and g represent integers such that

e f 7 g 12 17

is a list of integers written in order of size.

The integers have

- a range of 15
- a median of 8.5
- a mean of 9

Work out the value of e , the value of f and the value of g

$$e = \dots\dots\dots$$

$$f = \dots\dots\dots$$

$$g = \dots\dots\dots$$

(Total for Question 4 is 3 marks)

5 Show that $3\frac{5}{7} + 1\frac{2}{3} = 5\frac{8}{21}$

(Total for Question 5 is 3 marks)



6 Eli and Peta share \$275 in the ratio 2:3

Eli gives $\frac{3}{11}$ of his share to charity.

Peta gives 0.32 of her share to charity.

Work out the total amount that Eli and Peta give to charity.

\$.....

(Total for Question 6 is 4 marks)

7 The weight of a bag of apples is 475 g correct to the nearest g

(a) Write down the lower bound of the weight.

..... g
(1)

The height of a box is 120 cm correct to the nearest 10 cm

(b) Write down the upper bound for the height.

..... cm
(1)

(Total for Question 7 is 2 marks)



DO NOT WRITE IN THIS AREA

DO NOT WRITE IN THIS AREA

DO NOT WRITE IN THIS AREA

8 $\frac{8^{-2} \times 8^9}{8^{10}} = 8^n$

Work out the value of n

$n = \dots\dots\dots$

(Total for Question 8 is 2 marks)

- 9 Hari scored 140 points playing a game on Tuesday.
This was 12% more points than he scored playing the game on Monday.

Work out the number of points that Hari scored playing the game on Monday.

(Total for Question 9 is 3 marks)



10 (a) Simplify $(6m)^0$

.....
(1)

(b) Solve $5y + 20 < 7y + 1$

.....
(2)

(c) Factorise fully $15w^2x^5 + 25w^3x^2$

.....
(2)

(d) Simplify fully $\frac{36a^5c^7}{12a^2c^3}$

.....
(2)

(Total for Question 10 is 7 marks)



DO NOT WRITE IN THIS AREA

DO NOT WRITE IN THIS AREA

DO NOT WRITE IN THIS AREA

11 ABC is a right-angled triangle.

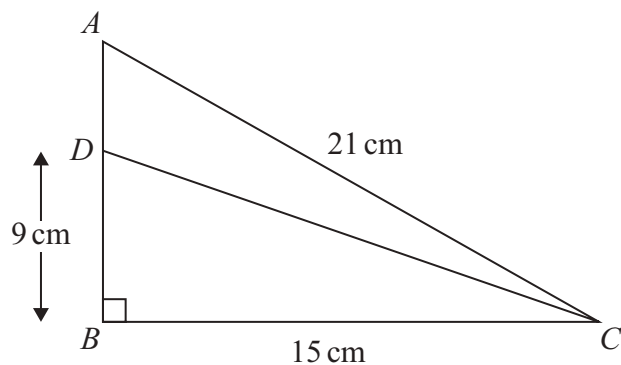


Diagram **NOT** accurately drawn

$AC = 21\text{ cm}$ $BC = 15\text{ cm}$ angle $ABC = 90^\circ$

The point D lies on AB such that $DB = 9\text{ cm}$

Work out the size of angle ACD

Give your answer correct to one decimal place.

.....
(Total for Question 11 is 4 marks)



P 7 9 7 8 5 A 0 9 2 8

12

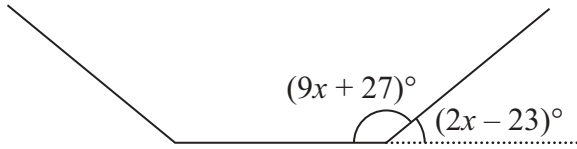


Diagram **NOT**
accurately drawn

The diagram shows part of a regular n -sided polygon with

an interior angle of $(9x + 27)^\circ$

an exterior angle of $(2x - 23)^\circ$

Work out the value of n

$n = \dots\dots\dots$

(Total for Question 12 is 4 marks)

DO NOT WRITE IN THIS AREA

DO NOT WRITE IN THIS AREA

DO NOT WRITE IN THIS AREA



DO NOT WRITE IN THIS AREA

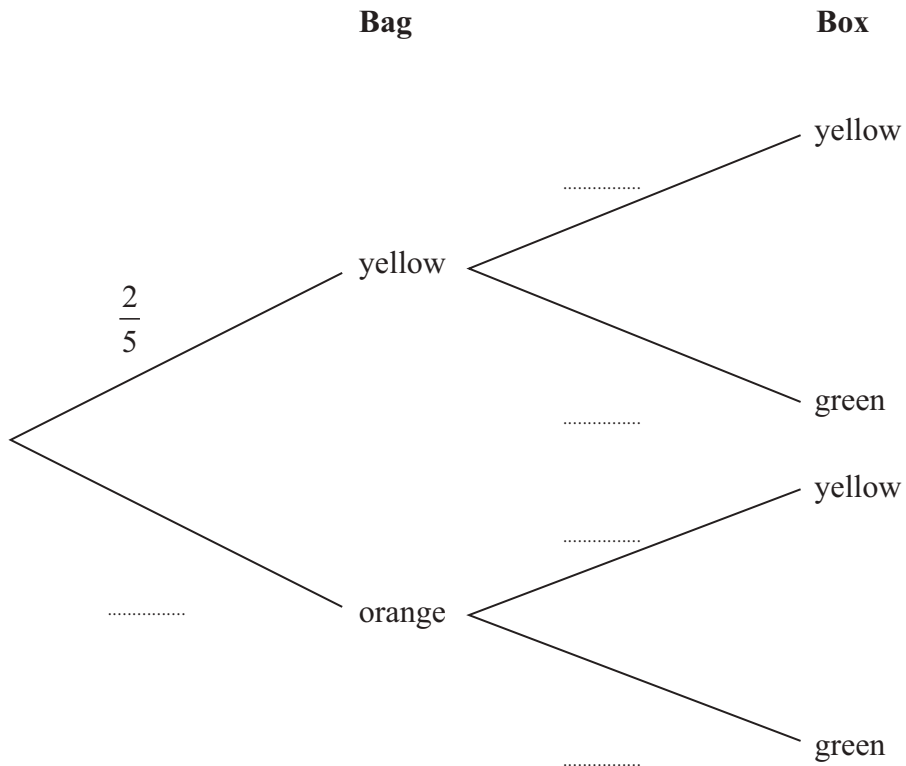
DO NOT WRITE IN THIS AREA

DO NOT WRITE IN THIS AREA

13 In a bag, there are only 2 yellow beads and 3 orange beads.
In a box, there are only 3 yellow beads and 5 green beads.

Chi takes at random a bead from the bag and a bead from the box.

(a) Complete the probability tree diagram.



(2)

(b) Work out the probability that Chi takes two beads of different colours.

(3)

(Total for Question 13 is 5 marks)



14 (a) Expand and simplify $7x(3x + 2)(2x - 5)$

.....

(3)

(b) Solve $\frac{9}{2y} + \frac{5}{7} = 5$

Show clear algebraic working.

$y =$

(3)

(Total for Question 14 is 6 marks)



DO NOT WRITE IN THIS AREA

DO NOT WRITE IN THIS AREA

DO NOT WRITE IN THIS AREA

15 AOB is a sector of a circle with centre O and radius 12 cm

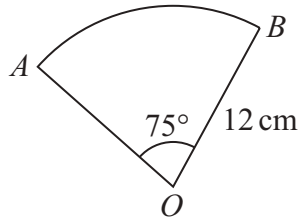


Diagram **NOT** accurately drawn

Work out the area of the sector.
Give your answer correct to 3 significant figures.

..... cm²

(Total for Question 15 is 2 marks)

16 Ivan asked 15 people how many books they read last year.

Here are his results.

1 1 3 4 6 7 8 9 10 12 15 25 30 37 50

Work out the interquartile range of the number of books read.

.....

(Total for Question 16 is 2 marks)



17 Show that $\frac{2\sqrt{7} + 2}{\sqrt{7} - 3}$ can be written in the form $a - \sqrt{b}$ where a and b are integers.

Show your working clearly.

(Total for Question 17 is 3 marks)

18 Make y the subject of $p = \sqrt{\frac{y + w}{3y - t}}$

(Total for Question 18 is 4 marks)

DO NOT WRITE IN THIS AREA

DO NOT WRITE IN THIS AREA

DO NOT WRITE IN THIS AREA



DO NOT WRITE IN THIS AREA

19 The diagram shows triangle ABC

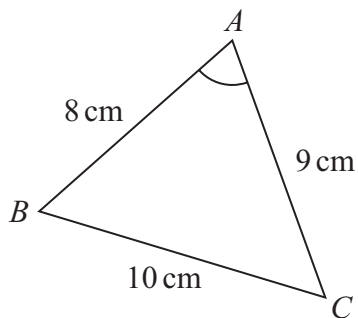


Diagram **NOT** accurately drawn

$$AB = 8 \text{ cm} \quad BC = 10 \text{ cm} \quad CA = 9 \text{ cm}$$

Work out the size of angle BAC
Give your answer correct to one decimal place.

.....
(Total for Question 19 is 3 marks)



P 7 9 7 8 5 A 0 1 5 2 8

DO NOT WRITE IN THIS AREA

DO NOT WRITE IN THIS AREA

DO NOT WRITE IN THIS AREA

20 The straight line **L** has equation $y = 4x + 7$

The straight line **M** is perpendicular to **L** and passes through the point with coordinates (8, 1)

Find an equation for **M**

Give your answer in the form $y = mx + c$

.....
(Total for Question 20 is 3 marks)



DO NOT WRITE IN THIS AREA

DO NOT WRITE IN THIS AREA

DO NOT WRITE IN THIS AREA

21 Express $5x^2 - 20x + 23$ in the form $a(x - b)^2 + c$ where a , b and c are integers.

.....
(Total for Question 21 is 3 marks)



DO NOT WRITE IN THIS AREA

DO NOT WRITE IN THIS AREA

DO NOT WRITE IN THIS AREA

22 There are 15 buttons in a box.

- 3 of the buttons are red
- 2 of the buttons are pink
- 10 of the buttons are blue

Pete takes at random three buttons from the box.

Work out the probability that there is still at least one pink button in the box.

.....
(Total for Question 22 is 3 marks)



DO NOT WRITE IN THIS AREA

23 $a = \frac{2x + 5}{1 - x}$ $x = \frac{5 - 2y}{3y}$

Write a in the form $\frac{m + ny}{p(y - 1)}$ where m , n and p are integers.

Show your working clearly.

$a = \dots\dots\dots$

(Total for Question 23 is 3 marks)



24 A curve has equation $y = f(x)$

There is only one turning point on the curve.
The coordinates of this turning point are $(4, 3)$

Write down the coordinates of the turning point on the curve with equation

(i) $y = f(x + 5)$

(..... ,)
(1)

(ii) $y = f(x) + 7$

(..... ,)
(1)

(iii) $y = f(2x)$

(..... ,)
(1)

(Total for Question 24 is 3 marks)



DO NOT WRITE IN THIS AREA

DO NOT WRITE IN THIS AREA

DO NOT WRITE IN THIS AREA

25 Solve the inequality $2x^2 + x - 28 > 0$
Show clear algebraic working.

.....
(Total for Question 25 is 3 marks)

Turn over for Question 26



26 Here is a prism $ABCDEFGH$ with a horizontal, rectangular base $ABGF$

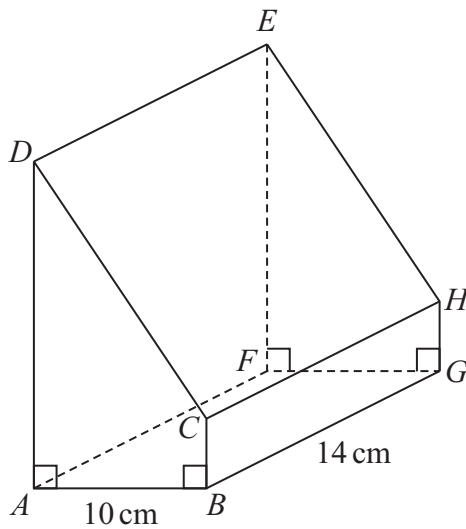


Diagram **NOT** accurately drawn

$$AB = 10 \text{ cm} \quad BG = 14 \text{ cm}$$

$$\text{angle } DAB = \text{angle } ABC = \text{angle } EFG = \text{angle } FGH = 90^\circ$$

$$BC = \frac{1}{5} AD$$

The angle of elevation of E from B is 50°

Calculate the volume of the prism.

Give your answer correct to 3 significant figures.

Show your working clearly.

DO NOT WRITE IN THIS AREA

DO NOT WRITE IN THIS AREA

DO NOT WRITE IN THIS AREA



DO NOT WRITE IN THIS AREA

DO NOT WRITE IN THIS AREA

DO NOT WRITE IN THIS AREA

..... cm³

(Total for Question 26 is 5 marks)

Turn over for Question 27



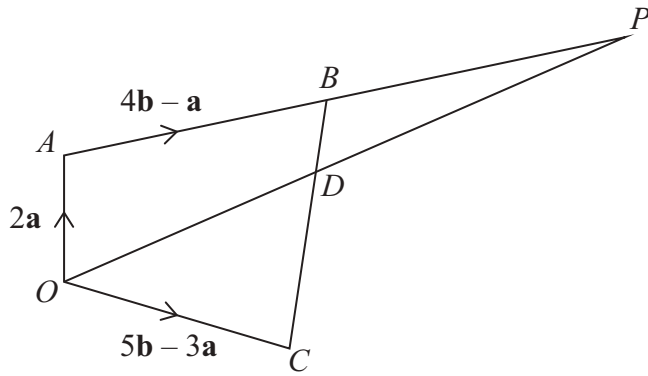


Diagram **NOT**
accurately drawn

$OABC$ is a quadrilateral.
 ABP and ODP are straight lines.

$$\vec{OA} = 2\mathbf{a} \quad \vec{AB} = 4\mathbf{b} - \mathbf{a} \quad \vec{OC} = 5\mathbf{b} - 3\mathbf{a}$$

- (a) Find an expression in terms of \mathbf{a} and \mathbf{b} for the vector \vec{BC}
Simplify your answer.

(2)

The point D lies on BC such that $BD:DC = 1:3$

Given that $\vec{OP} = n\vec{OD}$

- (b) use a vector method to find the value of n



DO NOT WRITE IN THIS AREA

DO NOT WRITE IN THIS AREA

DO NOT WRITE IN THIS AREA

$$n = \dots\dots\dots (4)$$

(Total for Question 27 is 6 marks)

Turn over for Question 28



- 28 The curve **C** has equation $x^2 + y^2 = d - 11x$ where d is an integer.
The line **L** has equation $y = 3x + e$ where e is an integer.

C and **L** intersect at the point A and at the point B

The coordinates of A are $(0.2, 2.6)$

Work out the coordinates of B

Show your working clearly.

DO NOT WRITE IN THIS AREA

DO NOT WRITE IN THIS AREA

DO NOT WRITE IN THIS AREA



DO NOT WRITE IN THIS AREA

DO NOT WRITE IN THIS AREA

DO NOT WRITE IN THIS AREA

(.....,.....)

(Total for Question 28 is 6 marks)

TOTAL FOR PAPER IS 100 MARKS

